

ATOMIC ENERGY CENTRAL SCHOOL ANUPURAM WORKSHEET

CLASS-III

SUBJECT-MATHEMATICS

NAME-_____ Roll No.-_____

2. Fun with Numbers

1. Fill in the missing numerals

200					205
478					483
765					770

2. Write the number names for the following

- a) **199** _____
- b) **213** _____
- c) **341** _____
- d) **605** _____

3. Counting by 2's write the numbers starting from:

322				
414				
120				
550				

4. Counting by 5's write the numbers starting from:

634				
852				
421				
323				

5. Namratha has 38 stamps. Rohini collected 42 stamps. Anand collected 58 stamps. Mohan collected 25 stamps.

Now fill in the blanks.

- ❖ _____ has the most stamps.
- ❖ Namratha will collect _____ more stamps to be equal to Rohini.
- ❖ _____ children have more than 30 stamps.
- ❖ If Rohini gets 8 more stamps, she will have _____ stamps.
- ❖ _____ needs 2 more stamps to have 60.
- ❖ _____ has 2 stamps less than 40.
- ❖ _____ has 5 stamps more than 20.

6. Count in 50's and fill in the blanks.

- 100, 150, 200, _____, _____
- 300, 350, 400, _____, _____
- 550, 600, 650, _____, _____
- 750, 800, 850, _____, _____
- 600, 650, 700, _____, _____

7. Who am I? Match with the number.

a) I come between 60 and 70 and there is a 5 in my name.

7

b) I have 8 in my name and I am very close to 80.

9

c) If you hit a 6 after me, you score a century.

6

d) I am equal to ten notes of 5.

150

e) I am a century+ a half century.

7

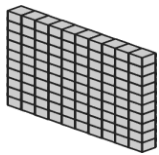
f) I am exactly in between 65 and 85.

5

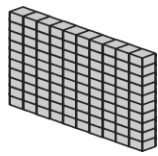
8. How many are these?








100



100



9. Match the following.

$300 + 10 + 9$

124

$4 + 100 + 20$

550

$800 + 6$

319

$70 + 8$

728

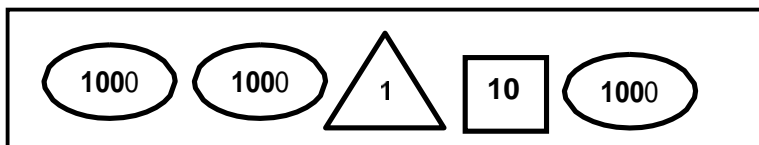
$500 + 50$

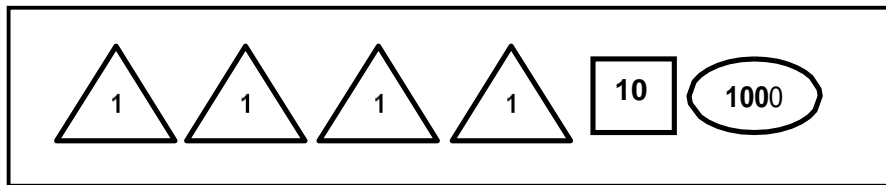
806

$700 + 20 + 8$

78

10. Add and write the number in the box.





11. Write the Expanded form of the following Numbers.

1. $732 = 700 + 30 + 2.$
2. $123 = \underline{\hspace{2cm}}$
3. $390 = \underline{\hspace{2cm}}$
4. $589 = \underline{\hspace{2cm}}$
5. $666 = \underline{\hspace{2cm}}$
6. $909 = \underline{\hspace{2cm}}$
7. $576 = \underline{\hspace{2cm}}$
8. $345 = \underline{\hspace{2cm}}$
9. $809 = \underline{\hspace{2cm}}$
10. $200 = \underline{\hspace{2cm}}$
11. $851 = \underline{\hspace{2cm}}$
12. $454 = \underline{\hspace{2cm}}$
13. $333 = \underline{\hspace{2cm}}$
14. $666 = \underline{\hspace{2cm}}$
15. $760 = \underline{\hspace{2cm}}$

