

**ATOMIC ENERGY CENTRAL SCHOOL ANUPURAM**

**WORKSHEET**

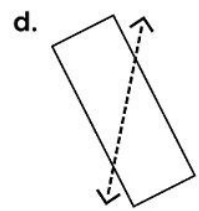
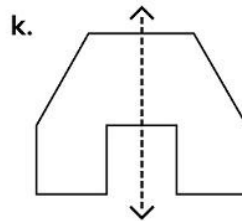
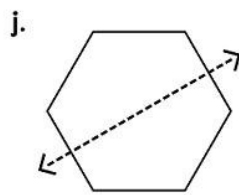
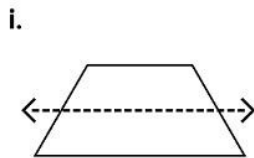
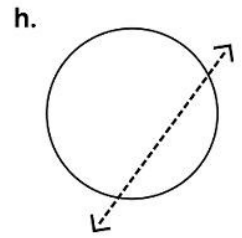
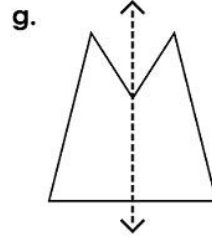
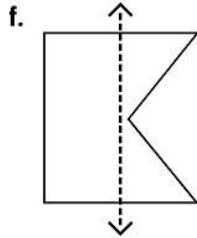
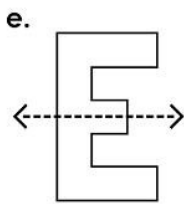
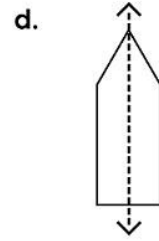
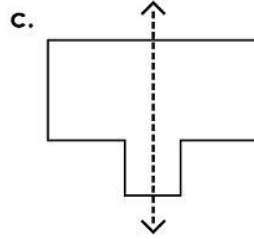
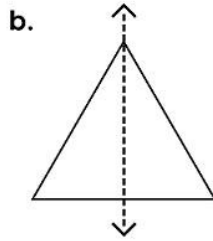
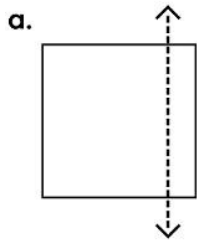
**CLASS-III**

**SUBJECT-MATHEMATICS**

**NAME-\_\_\_\_\_ Roll No.-\_\_\_\_\_**

---

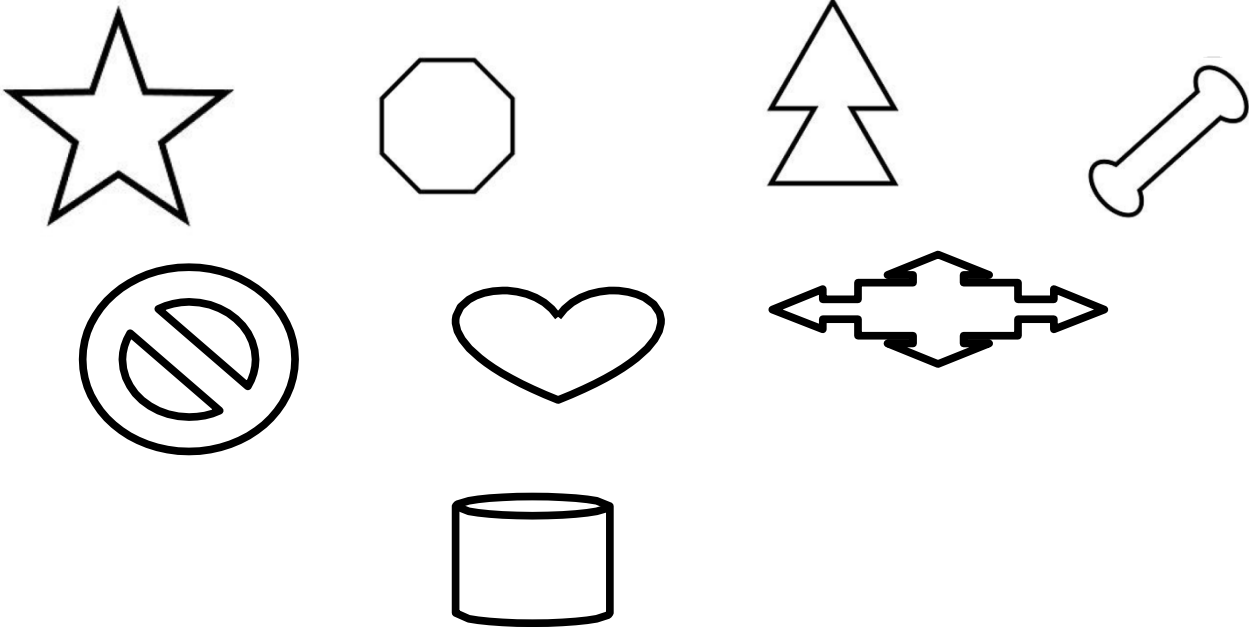
1. Does the dotted line divide each picture into two similar mirror halves? Write 'Yes' or 'No'



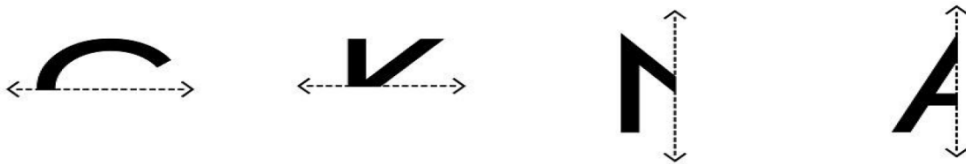
2. Using a dotted line, divide the following letters into two similar halves?

**E W U T**

3. Using a dotted line, divide the following pictures into two similar halves.



4. Draw the mirror half of each letter.



5. Draw the mirror half of each letter in each of the following words.

**HOOK**

**KID**

DICE


V  
E  
C

BOOK

V  
A  
Y



6. Underline the correct view to look at these things



TOP / SIDE / FRONT



TOP / SIDE / FRONT

---

7. Observe the following figures and complete the other half



8. Complete these figures to form the basic shapes.

